





Which dragon is the favorite?

Name _____ Date _____

Directions: Interview classmates about which dragon is favorite. Fill in graph bars from bottom up.

				
30				
29				
38				
37				
36				
35				
34				
33				
32				
31				
30				
29				
28				
27				
26				
25				
24				
23				
22				
21				
20				
19				
18				
17				
16				
15				
14				
13				
12				
11				
10				
9				
8				
7				
6				
5				
4				
3				
2				
1				